

1 2 3

12

Lesson 14 Quiz

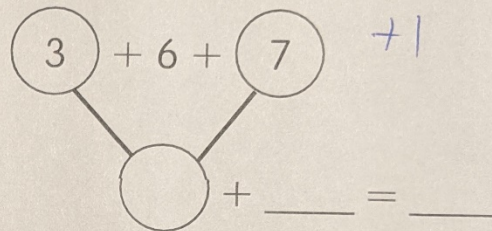
Name _____

Solve.

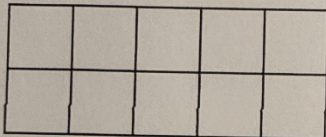
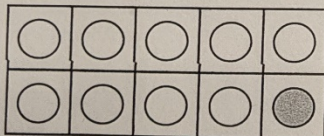
1 Aba has 3 hens. Jon gives her 6 more hens. Then Aba gets 7 more hens. How many hens does Aba have now?

+ | _____ + _____ + _____ = _____

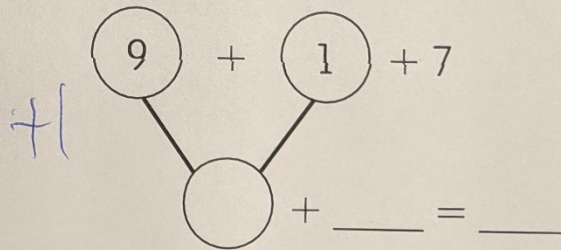
+ | _____ hens



2 There are 9 frogs on a log. 1 more frog hops on the log. Then 7 more frogs hop on. How many frogs are on the log?



+ | _____ frogs



Solve.

- 3 Find $2 + 6 + 8$. Show your work.

 $+1$ $+1$ _____

- 4 Luke has 2 pens. Deb has 7 pens. Ravi has 5 pens.
How many pens in all?

 $+1$ _____ + _____ + _____ = _____ $+1$ _____ pens $+1$

- 5 Find $5 + 6 + 6$. Show your work.

 $+1$ $+1$ _____